

1st #5

**Multiple Choice**

Identify the letter of the choice that best completes the statement or answers the question.

\_\_\_ 1. What is the missing number?



7

+



2

= 9



2

+



\_\_\_

= 9

a. 2

b. 6

c. 7

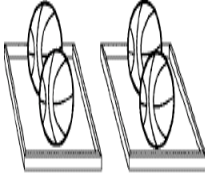
d. 9

\_\_\_ 2. Which picture shows these related facts?

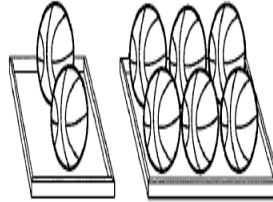
$$2 + 6 = 8$$

$$8 - 2 = 6$$

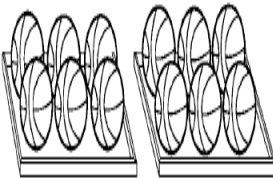
a.



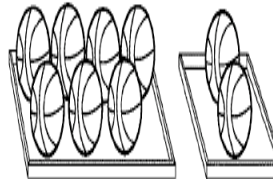
c.



b.

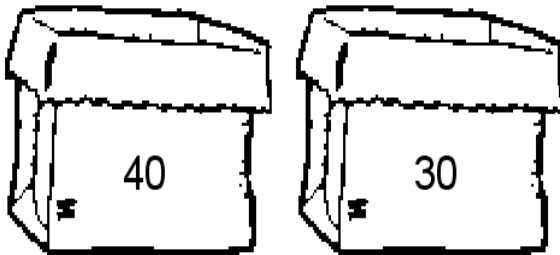


d.



\_\_\_ 3. Fred has 40 marbles in one bag and 30 marbles in another bag.

How many marbles in all?



a. 80 marbles

b. 70 marbles

c. 60 marbles

d. 50 marbles

## 1st #5

### Answer Section

#### MULTIPLE CHOICE

1. ANS: C REF: 0302 Lesson 3-2: Adding in Any Order  
OBJ: Use the commutative property to find sums.  
TOP: Intervention B18: Adding in Any Order, NCTM PrK-2: Alg.2.1, NCTM PrK-2: Alg.2.2, NCTM PrK-2: Alg.3.1, NCTM PrK-2: Num.1.1, NCTM PrK-2: Num.1.4, NCTM PrK-2: Num.1.5, NCTM PrK-2: Num.2.1, NCTM PrK-2: Num.2.2, NCTM PrK-2: Num.3.1, NCTM PrK-2: Num.3.3  
KEY: addition, whole numbers, algebra, basic facts/fact strategies
2. ANS: C REF: 0405 Lesson 4-5: Using Related Facts  
OBJ: Write related addition and subtraction facts.  
TOP: Intervention B27: Relating Addition and Subtraction, NCTM PrK-2: Alg.2.1, NCTM PrK-2: Alg.2.2, NCTM PrK-2: Alg.3.1, NCTM PrK-2: Num.1.1, NCTM PrK-2: Num.1.4, NCTM PrK-2: Num.1.5, NCTM PrK-2: Num.2.1, NCTM PrK-2: Num.2.2, NCTM PrK-2: Num.3.1, NCTM PrK-2: Num.3.3  
KEY: subtraction, addition, whole numbers, basic facts/fact strategies, algebra
3. ANS: B REF: 1201 Lesson 12-1: Adding Groups of 10  
OBJ: Add two multiples of 10 for sums to 100.  
TOP: Intervention C1: Adding Tens, NCTM PrK-2: Alg.2.2, NCTM PrK-2: Alg.3.1, NCTM PrK-2: Num.1.1, NCTM PrK-2: Num.1.2, NCTM PrK-2: Num.1.4, NCTM PrK-2: Num.1.5, NCTM PrK-2: Num.2.1, NCTM PrK-2: Num.2.2, NCTM PrK-2: Num.3.1, NCTM PrK-2: Num.3.3  
KEY: addition, whole numbers