


4th#6

Multiple Choice

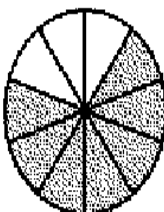
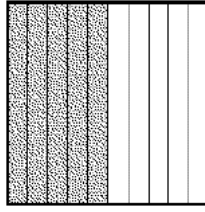

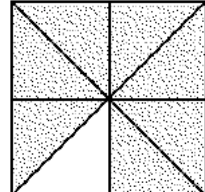
Identify the letter of the choice that best completes the statement or answers the question.

- ___ 1. Write a fraction and a decimal for the part of the grid that is shaded.

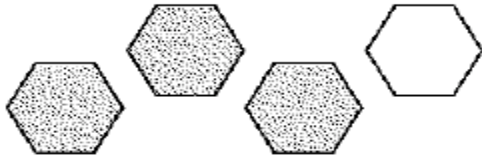


- a. $\frac{3}{100}$, 0.03 b. $\frac{1}{25}$, 0.04 c. $\frac{3}{10}$, 0.30 d. $\frac{2}{5}$, 0.40

- ___ 2. Oceans and seas cover about 0.7 of the Earth's surface. Which picture shows this part shaded?

a. 	c. 
b. 	d. 

___ 3. What decimal represents the amount that is not shaded?



a.	0.75	b.	0.30	c.	0.25	d.	3.1
----	------	----	------	----	------	----	-----

4th#6

Answer Section

MULTIPLE CHOICE

1. ANS: C REF: 1101 Lesson 11-1: Decimals and Fractions
OBJ: Relate decimals to common fraction benchmarks, and write decimals in 10ths and 100ths.
TOP: Intervention I4: Fractions, Decimals, and the Number Line, NCTM 3-5: Alg.1.1, NCTM 3-5: Alg.2.2, NCTM 3-5: Num.2.2, NCTM 3-5: Num.3.1, NCTM 3-5: Num.3.2, NCTM 3-5: Num.3.4
KEY: decimals, fractions
2. ANS: A REF: 0901 Lesson 9-1: Parts of a Region
OBJ: Identify and draw fractional parts of a region.
TOP: Intervention H12: Parts of a Region, NCTM 3-5: Num.1.3, NCTM 3-5: Num.1.6
KEY: fractions, Geography
3. ANS: B REF: 0902 Lesson 9-2: Parts of a Set
OBJ: Identify fractional parts of sets or groups and divide sets to show fractional parts.
TOP: Intervention H14: Parts of a Set, NCTM 3-5: Num.1.3, NCTM 3-5: Num.1.6
KEY: fractions